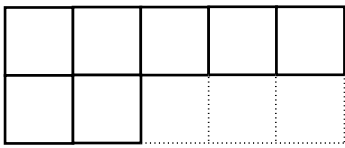
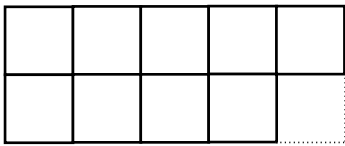



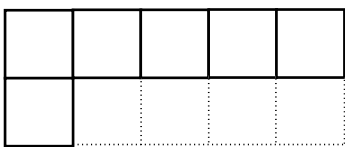
3. Uzupełnij rysunki oraz zapisy według wzoru.



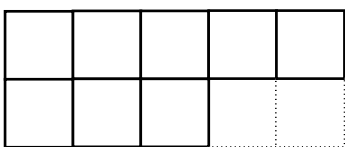
$$5 = 2 + \square$$



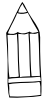
$$5 = 4 + \square$$



$$5 = 1 + \square$$



$$5 = 3 + \square$$



4. Wstaw w okienka odpowiednie liczby.

$$3 + \square = 4$$



$$2 + \square = 4$$



$$3 + \square = 4$$



$$2 + \square = 3$$



$$1 + \square = 3$$



$$2 + \square = 5$$



$$5 - \square = 4$$



$$3 - \square = 2$$



$$5 - \square = 2$$



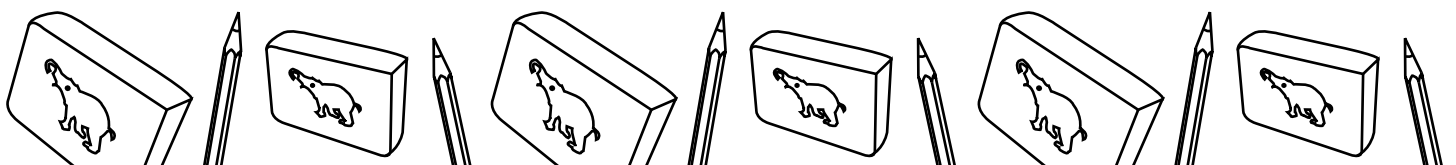
$$4 - \square = 1$$



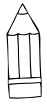
$$4 - \square = 3$$



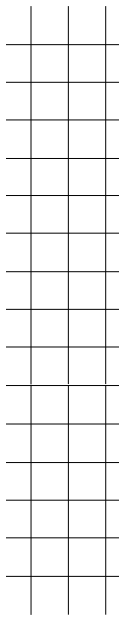
$$5 - \square = 1$$







6. Uzupełnij zapisy według wzoru.



$$4 = \overset{\bullet\bullet}{\square} + \overset{\bullet\bullet}{\square}$$

$$3 = \overset{\bullet\bullet}{\square} + \overset{\bullet}{\square}$$

$$2 = \overset{\bullet}{\square} + \overset{\bullet}{\square}$$

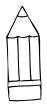
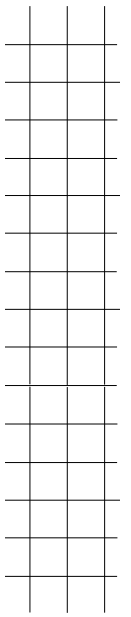
$$5 = \overset{\bullet\bullet\bullet}{\square} + \overset{\bullet\bullet}{\square}$$

$$3 = \overset{\bullet}{\square} + \overset{\bullet}{\square} + \overset{\bullet}{\square}$$




$$5 = \overset{\bullet\bullet\bullet}{\square} + \overset{\bullet}{\square} + \overset{\bullet}{\square}$$

$$5 = \overset{\bullet\bullet}{\square} + \overset{\bullet}{\square} + \overset{\bullet\bullet}{\square}$$

$$5 = \overset{\bullet}{\square} + \overset{\bullet\bullet\bullet}{\square} + \overset{\bullet}{\square}$$

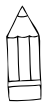


7. Uzupełnij tabelki.

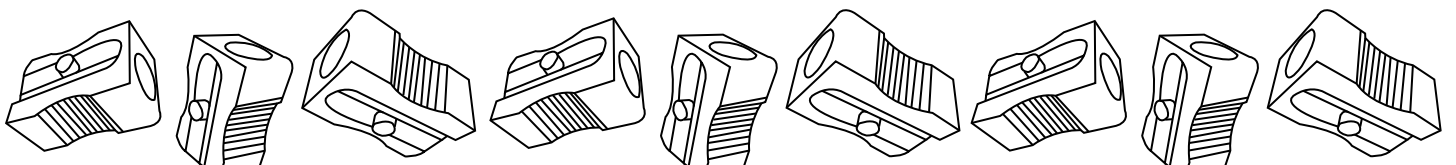
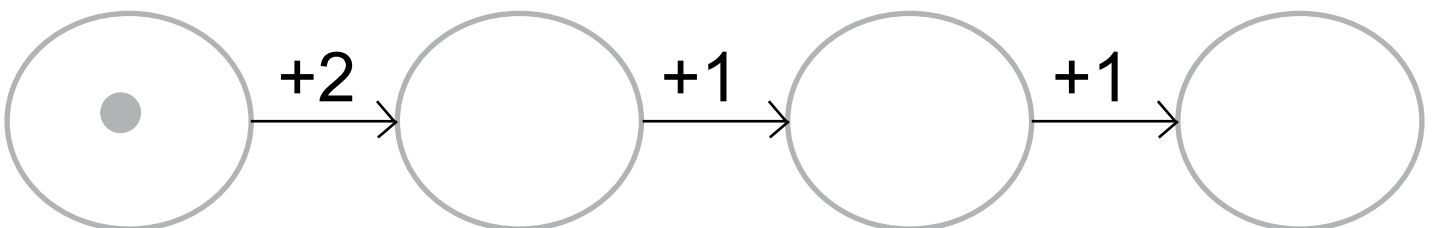
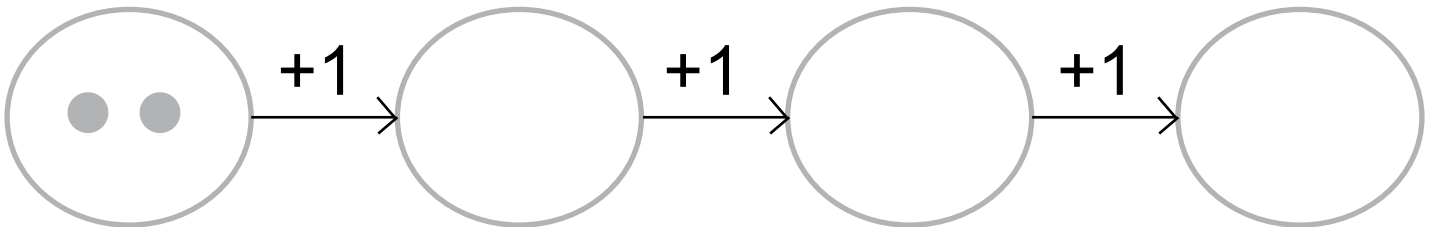


+1	3	1	4	2


+2	1	3	2	0



8. Narysuj odpowiednią liczbę elementów w zbiorach.







12. Pokoloruj obrazek według opisu.

1 – czerwony

2 – zielony

3 – niebieski

4 – żółty

5 – fioletowy

